

Tantárgy: Matematika

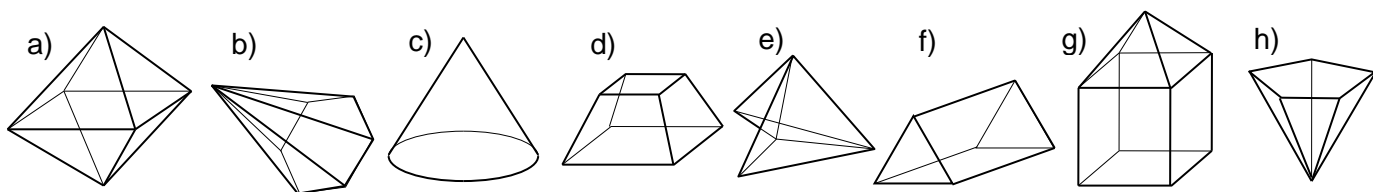
Osztály: 8.a

Anyag: Témazáró megírása

Dátum: 2020.05.21

Témazáró dolgozat - Térgeometria


1. Válaszd ki a testek közül a gúlákat! Karikázd be ezeknek a betűjeleit!



2. Számítsd ki a négyzetes oszlop felszínét és térfogatát, ha alapélei 8 cm hosszúak és a test magassága 14 cm!



3. Számítsd ki az egyenes körhenger felszínét és térfogatát, ha alapkörének átmérője 10 cm és a henger magassága az alapkör sugarának a 2-szeres!



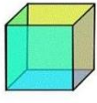
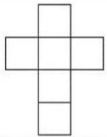
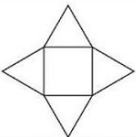
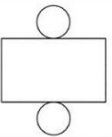

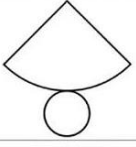
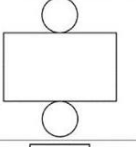


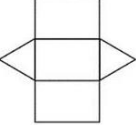
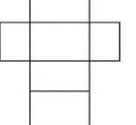
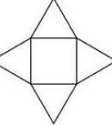

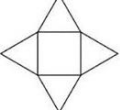
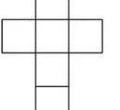
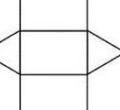
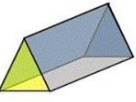
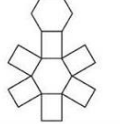
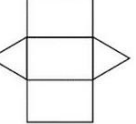
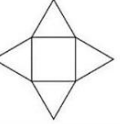
4. Számítsd ki a négyzet alapú gúla felszínét, és térfogatát ha minden éle 10 cm hosszú, és az oldallapok magassága 8,6 cm! A gúla magassága 7 cm.


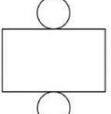
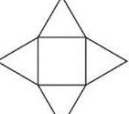
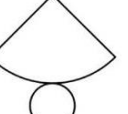
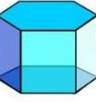
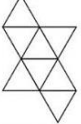
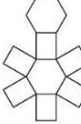


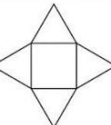
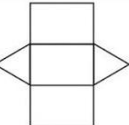


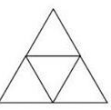
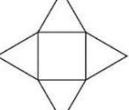
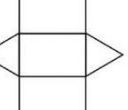


5. Melyik a test hálója? Csak a szám, betű kódokat írd le!

①.

pl. 1. – A.

	Ⓘ	A.	B.	C.
1.				
2.				
3.				
4.				
				

	Ⓜ	A.	B.	C.
1.				
2.				
3.				
4.				
5.	